

Grammar and punctuation

1. Add the correct verb to the sentences below.

- The cakes _____ delicious. (was/were)
- Ben and Sam _____ to gym every day. (go/goes)
- My mum _____ my sister to the school. (take/takes)

2. Circle the determiners in the sentences below.

- We went to the restaurant and had a great time!
- Sara likes that dress in the shopping centre.

Arithmetic

1. $276 + 100 =$

2. $510 - 289 =$

3. $42 \times 2 =$

4. $80 \div 2 =$

5. $\frac{2}{5} + \frac{3}{5} =$



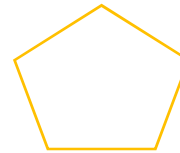
Spelling

Find the meaning, write synonym and make sentence of each given word.

- ❖ permission
- ❖ admission
- ❖ expansion

Reasoning

1. Circle the shapes that have parallel lines and cross the shapes that have perpendicular lines.



2. Sara read a book with 315 pages in one week. She read equal amount of pages each day. How many pages does she read every day?



3. Which animal is the heaviest? Circle your answer.



1406 g



14.6 kg

Grammar and punctuation

1. Add speech marks to the sentence below and rewrite the sentence again.

Ria looked sadly out of the window. I wish it would stop raining so, I could go out to play with my friends, she thought.

2. What prefix can be added to these three words that means 'against' or 'opposite'?

_____septic

_____agree

_____place

Arithmetic

1. $378 + 443 =$

2. $922 - 613 =$

3. $155 \div 5 =$

4. 88×6

5. $\frac{3}{5}$ of 90 =

Spelling

Find the meaning, write a synonym and make a sentence of each given word.

- ❖ Information
- ❖ adoration
- ❖ sensation

Reasoning

1. Put these fractions in order from smallest to largest.

$$\frac{3}{5}$$

$$\frac{2}{4}$$

$$\frac{8}{9}$$

$$\frac{3}{10}$$

$$\frac{2}{3}$$

2. Sam says I have 499 candies. He says he can equally share them among 9 children. Is he correct? Explain why.

3. Convert these units.

2500g = _____ kg

6.25m = _____ cm

32.5cm = _____ mm

5.9km = _____ m

Grammar and punctuation

1. Underline the adverbials in these sentences.
- The pirate hid his treasure in the golden chest.
 - The thief ran away with out a sound.
 - Sam ran as fast as he could to catch the bus.
 - Ali plays football with his friends every Sunday.
2. Rewrite the sentence with the fronted adverbial. Remember to add comma.
- We went to the beach last year.


Arithmetic

1. $756 + 524 =$
2. $635 - 324 =$
3. $77 \times 4 =$
4. $72 \div 2 =$
5. $\frac{12}{15} - \frac{3}{15} =$

Spelling

- Find the meaning, write a synonym and make a sentence of each given word.
- ❖ preparation
 - ❖ admiration
 - ❖ invasion

Reasoning

1. In one day, 7289 people visited a supermarket. 2091 of them bought vegetables, whereas the others bought meat. How many people bought meat?
-
2. Compare these decimals using <, > or =.
- | | | |
|--------|--|-------|
| 3.03 | | 3.30 |
| 2.13 | | 1.20 |
| 1.2 cm | | 12 mm |
3. Measure this line using a ruler. Write its length in cm and in mm.
- 

Grammar and punctuation

1. Write a sentence using inverted commas.

I love playing football.



Sara

2. Complete the fronted adverbial given below.

In the middle of the night, _____

Arithmetic

- 1. $1332 + 1122 =$
- 2. $1128 - 1127 =$
- 3. $42 \times 9 =$
- 4. $49 \div 7 =$
- 5. $3.69 - 2.01 =$

Spelling

Find the meaning, write a synonym and make a sentence of each given word.

- ❖ confusion
- ❖ decision
- ❖ collision

Reasoning

1. Put these numbers in order from smallest to largest.

10 110 10 011 10 101 10 100 10 111

Smallest

Largest

2. Anna has these cards.



a) What is the largest number that can be made from these cards?

b) What is the smallest number that can be made from these cards?

Grammar and punctuation

Last year In the deep dark forest Before the sun rose

In the afternoon All night long

Choose a fronted adverbial to complete these sentences.

- 1. _____, a ferocious lion lived in a cave.
- 2. _____, we made some lip-smacking pancakes.
- 3. _____, she worked tirelessly on her project.
- 4. _____, she ate all her breakfast.
- 5. _____, we visited the funfair.

Arithmetic

- 1. $6457 + 3244 =$
- 2. $7865 - 5962 =$
- 3. $5301 + \text{_____} = 7825$
- 4. $1000 \div 20 =$
- 5. $284 \div 4 =$

Spelling

Find the meaning, write a synonym and make a sentence of each given word.

- ❖ pressure
- ❖ reign
- ❖ separate

Reasoning

Write True or false.

a	7.09 rounded to the nearest whole number is 7.	
b	14.8 rounded to the nearest whole number is 14.	
c	3.71 rounded to the nearest tenth is 3.8.	
d	2500 rounded to the nearest 1000 is 3000.	

Continue the number sequence.

32	40	48				
----	----	----	--	--	--	--

225	250	275				
-----	-----	-----	--	--	--	--

54	63	72				
----	----	----	--	--	--	--

Grammar and punctuation

1. Tick the sentence that use apostrophe correctly.

☐ Many bat's make their home in caves.

☐ Theyr'e such good friends.

☐ This is my teacher's favourite book.

2. Replace the underlined words with the appropriate pronouns.

• Sara and Ben are best friends.

• Rida's mother works in a school. Rida's mother is a teacher.

Arithmetic

1. $1896 + 4872 =$

2. $1090 - 789 =$

3. _____ - 5012 = 2598

4. $2780 \div 10 =$

5. $\frac{13}{50} + \frac{20}{50} =$

Spelling

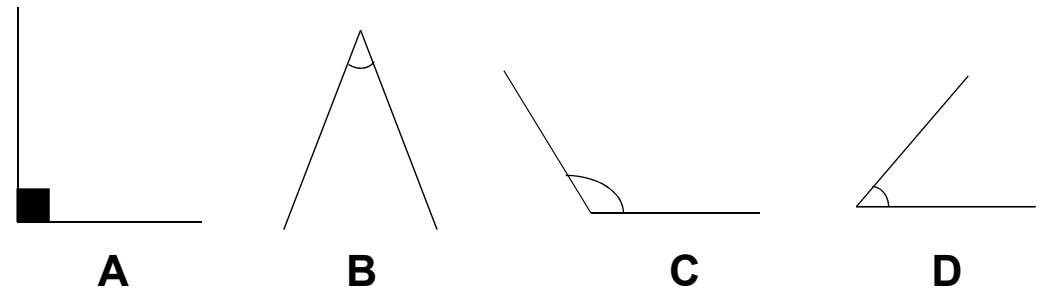
© The Mum Educates <https://themumeducates.com/>

Find the meaning, write a synonym and make a sentence of each given word.

- ❖ poisonous
- ❖ dangerous
- ❖ mountainous

Reasoning

1. Order the angles from the smallest to the largest.



2. Complete the symmetry figure given below.

